

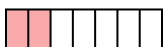
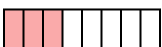








Determine which choice best answers each question.

**Answers**

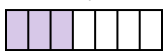


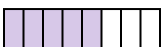
1) Which of the shapes below is shaded to represent  $\frac{2}{8}$ ?

- A.  B.   
 C.  D. 





2) Which of the shapes below is shaded to represent  $\frac{6}{10}$ ?

- A.  B.   
 C.  D. 





3) Which of the shapes below is shaded to represent  $\frac{4}{7}$ ?

- A.  B.   
 C.  D. 





4) Which of the shapes below is shaded to represent  $\frac{3}{5}$ ?

- A.  B.   
 C.  D. 





5) Which of the shapes below is shaded to represent  $\frac{3}{7}$ ?

- A.  B.   
 C.  D. 





6) Which of the shapes below is shaded to represent  $\frac{3}{10}$ ?

- A.  B.   
 C.  D. 





7) Which of the shapes below is shaded to represent  $\frac{2}{10}$ ?

- A.  B.   
 C.  D. 





8) Which of the shapes below is shaded to represent  $\frac{4}{6}$ ?

- A.  B.   
 C.  D. 

9) Which of the shapes below is shaded to represent  $\frac{4}{10}$ ?

- A.  B.   
 C.  D. 

10) Which of the shapes below is shaded to represent  $\frac{7}{10}$ ?

- A.  B.   
 C.  D. 



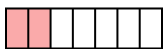
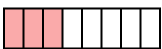
1. \_\_\_\_\_
2. \_\_\_\_\_
3. \_\_\_\_\_
4. \_\_\_\_\_
5. \_\_\_\_\_
6. \_\_\_\_\_
7. \_\_\_\_\_
8. \_\_\_\_\_
9. \_\_\_\_\_
10. \_\_\_\_\_







Determine which choice best answers each question.

**Answers**

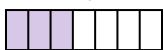



1) Which of the shapes below is shaded to represent  $\frac{2}{8}$ ?

- A.  B.   
 C.  D. 





2) Which of the shapes below is shaded to represent  $\frac{6}{10}$ ?

- A.  B.   
 C.  D. 





3) Which of the shapes below is shaded to represent  $\frac{4}{7}$ ?

- A.  B.   
 C.  D. 





4) Which of the shapes below is shaded to represent  $\frac{3}{5}$ ?

- A.  B.   
 C.  D. 





5) Which of the shapes below is shaded to represent  $\frac{3}{7}$ ?

- A.  B.   
 C.  D. 





6) Which of the shapes below is shaded to represent  $\frac{3}{10}$ ?

- A.  B.   
 C.  D. 





7) Which of the shapes below is shaded to represent  $\frac{2}{10}$ ?

- A.  B.   
 C.  D. 





8) Which of the shapes below is shaded to represent  $\frac{4}{6}$ ?

- A.  B.   
 C.  D. 

9) Which of the shapes below is shaded to represent  $\frac{4}{10}$ ?

- A.  B.   
 C.  D. 

10) Which of the shapes below is shaded to represent  $\frac{7}{10}$ ?

- A.  B.   
 C.  D. 

1.   **A**    
 2.   **A**    
 3.   **B**    
 4.   **D**    
 5.   **A**    
 6.   **A**    
 7.   **C**    
 8.   **A**    
 9.   **B**    
 10.   **A**